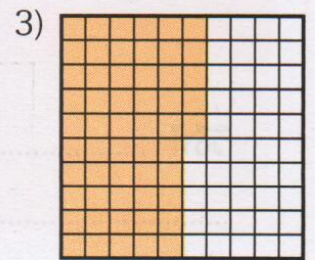

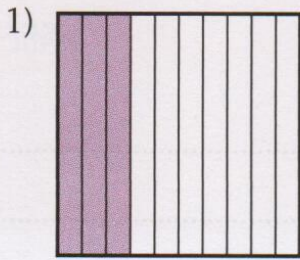


แบบฝึกหัด 7.1

1 เขียนเศษส่วนแสดงส่วนที่ระบายสี



2 เติมตัวเลขแสดงจำนวนใน

1)  $\frac{3}{5} = \frac{\square}{10} = \frac{\square}{100} = \frac{\square}{1000}$

2)  $\frac{10}{50} = \frac{\square}{10} = \frac{\square}{100} = \frac{\square}{1000}$

3)  $\frac{18}{20} = \frac{\square}{100} = \frac{\square}{\square} = \frac{\square}{\square}$

4)  $\frac{3}{4} = \frac{\square}{100} = \frac{\square}{1000} = \frac{\square}{\square}$

5)  $\frac{20}{25} = \frac{\square}{5} = \frac{\square}{10} = \frac{\square}{100}$

6)  $\frac{6}{12} = \frac{\square}{2} = \frac{\square}{\square} = \frac{\square}{\square}$

7)  $\frac{8}{1000} = \frac{\square}{\square} = \frac{\square}{\square} = \frac{\square}{\square}$